



SIDHESHWAR
PUBLIC SCHOOL
Learning Breeds Courtesy



Holidays Homework

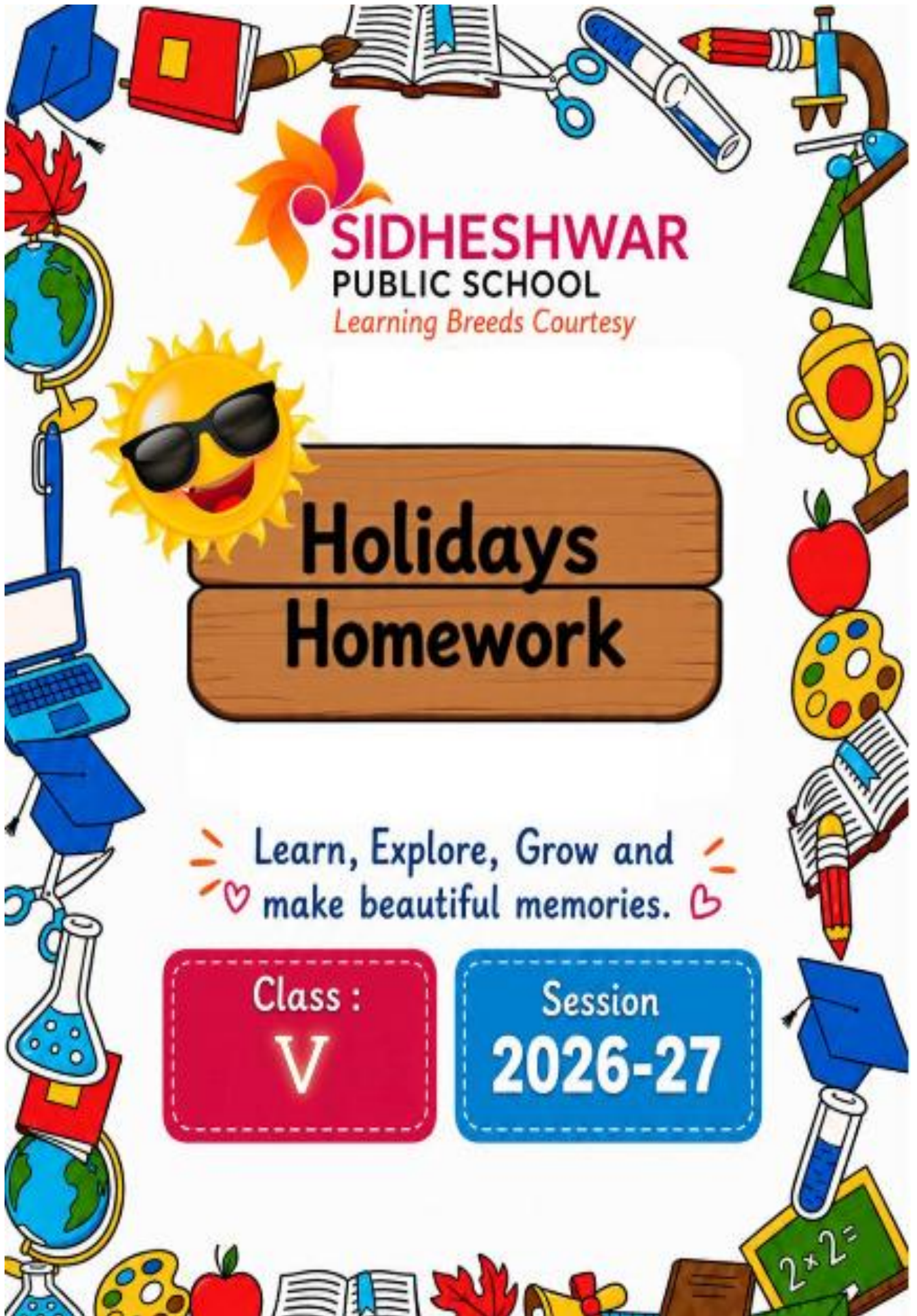
Learn, Explore, Grow and
♥ make beautiful memories. ♥

Class :

V

Session

2026-27





ENGLISH



SECTION A - GRAMMAR

Q1. Identify the Types of Sentences:

- a) Please close the door.
- b) What a beautiful garden it is!
- c) Do you like mangoes?
- d) The children are playing in the park.
- e) Never waste water.



Q5. Write whether the underlined noun is Countable or Uncountable:

- a) I need some water.
- b) She has five books.
- c) We ate delicious rice.
- d) The shopkeeper sold many toys.
- e) Please add some sugar to the tea.



Q2. Underline the Subject and Circle the Predicate:

- a) The little girl won the race.
- b) My brother plays cricket every evening.
- c) The birds are chirping loudly.
- d) Riya and Meera are best friends.
- e) The teacher explained the lesson clearly.



Q3. Identify the Kind of Noun:

(Common, Proper, Material, Concrete, Countable or Uncountable)

- a) Gold is a precious metal.
- b) Rahul lives in Delhi.
- c) The cat is sleeping on the sofa.
- d) Milk is good for health.
- e) We bought apples from the market.



Q4. Fill in the blanks with suitable nouns:

- a) _____ is the capital of India.
- b) My mother bought a _____ ring.
- c) The _____ barked loudly at night.
- d) Please give me a glass of _____.
- e) We saw many _____ in the zoo.



SECTION B - WRITING SKILLS

Q6. Notice Writing (Lost Notice)

You have lost your English notebook in the school library. Write a notice for the school notice board asking students to return it.



Q7. Application Writing

Write an application to the Principal asking for two days' leave due to fever.



SECTION C - LITERATURE

Read the extract and answer the questions (RTC):

"Rajendra Singh worked hard to bring water back to the dry villages of Rajasthan."

- a) Who is called the "Waterman of India"?
- b) In which state did he work?
- c) What problem did the villages face?
- d) How did his work help the villagers?
- e) What lesson do we learn from his work?



ACTIVITY

SECTION VA

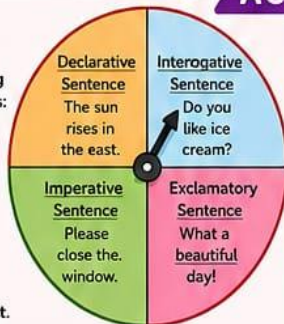
Roll no 1 to 12

1. Sentence Wheel

Make a colourful spinning wheel divided into 4 parts:

- Declarative Sentence
- Interrogative Sentence
- Imperative Sentence
- Exclamatory Sentence

Write one example in each part.



Roll no 13 to 23

2. "Noun City Model"

Make a small city on chart paper or cardboard:

- 🏫 School → Proper Noun (Delhi Public School, Gurgaon)
- 🏠 Houses → Common Nouns (house, shop, park)
- 🚗 Vehicles → Car, bus (countable nouns)
- 💧 Water tank → Water (uncountable noun)
- 🌟 Label everything clearly and make it like a mini city map.



SECTION VB

Roll no 1 to 12

2. "Noun Supermarket Model"

Create a small shop layout:

- 🍎 Fruits section → apple, mango (countable nouns)
- 🥛 Dairy section → milk, butter (uncountable nouns)
- 🏠 Brand names → Amul, Parle (proper nouns)
- 🪑 Items → chair, pen (common nouns)
- 🌟 Very colorful and fun to present.



Roll no 13 to 23

3. "Train Model"

Make a train:

- 🚂 Engine = Subject
- 🚋 Coaches = Predicate

Example:

Engine: The cat
Coaches: is sleeping on the sofa.

- 🌟 Write one sentence per train.



हिंदी

भाग क: साहित्य (Literature)

प्रश्न 1: निम्नलिखित प्रश्नों के उत्तर संक्षेप में लिखिए।

1. आपको अपने देश के किन-किन चीजों, त्योहारों और परंपराओं पर गर्व होता है?
2. कविता में भारत की नदियों का उदाहरण देकर कवि ने क्या संदेश दिया है?
3. ईदगाह कहानी के आधार पर हामिद और अमीन पत्र की विशेषताएँ लिखिए?

प्रश्न 2: रचनात्मक अभिव्यक्ति

यदि आपको 'ईदगाह' कहानी के आधार पर किसी के लिए कुछ खरीदने का अवसर मिले, तो आप किसके लिए क्या खरीदेंगे? अपने विचार 40-50 शब्दों में लिखिए।

भाग ख: व्याकरण (Grammar)

प्रश्न 3: रिक्त स्थानों की पूर्ति उचित शब्दों द्वारा कीजिए।

- क. मन के भावों को बोलकर प्रकट करना भाषा का _____ रूप है।
- ख. अंग्रेजी भाषा की लिपि _____ है।
- ग. वर्णों के व्यवस्थित समूह को _____ कहते हैं।

प्रश्न 4: वर्ण-विच्छेद कीजिए।

कक्षा

आलोक

विज्ञान

अध्यापक

प्रश्न 5: भाषा हमारे लिए क्यों आवश्यक है?

भाग ग: लेखन कौशल (Writing Skills)

6: संवाद लेखन (Dialogue Writing)

- दो मित्रों के बीच 'गर्मी की छुट्टियों की योजना' को लेकर होने वाली बातचीत को **60-80 शब्दों** में संवाद के रूप में लिखिए।

विशेष गतिविधि (Creative Activity)

“भारत की विविधता”

सभी विद्यार्थियों को एक A4 शीट अपने रोल नंबर के अनुसार भारत के किसी एक राज्य का कोलाज बनाना है। इसमें आपको निम्नलिखित जानकारी दर्शानी होगी:

उस राज्य की मुख्य भाषा।

वहाँ का प्रसिद्ध भोजन (चित्र सहित)।

वहाँ की पारंपरिक वेशभूषा।

रोल नं - 1-5 (राजस्थान)

6 -10 (पंजाब)

11-15 (गुजरात)

16-20 (केरल)

21-25 (हरियाणा)

गतिविधि (Activity) को अधिक से अधिक रचनात्मक बनाने का प्रयास करें।

विद्यार्थियों के लिए निर्देश:

*ग्रीष्म अवकाश कार्य करने के लिए अलग से एक स्कैपबुक बनाएँ।

* ध्यान दें यह कार्य अपनी हिंदी की नोटबुक में न करें।

*समस्त कार्य साफ़ और सुंदर लिखावट में होना चाहिए।


नोट: स्कूल खुलने के उपरांत यह असाइनमेंट आंतरिक मूल्यांकन (Internal Assessment) के लिए जमा किया जाएगा।

छुट्टियाँ मंगलमय हों!


ROLL NO. 1 TO 10

1 Maths Story Book (Word Problems)
Create a mini booklet with 8 word problems
Add drawings/pictures for each story

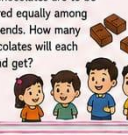
1 Shopping
Ria bought a doll for ₹125 and a ball for ₹75. How much money did she spend in all?




2 Vegetable Shop
A shopkeeper had 243 apples. He sold 158 apples. How many apples are left with him?




3 Sharing Chocolates
36 chocolates are to be shared equally among 4 friends. How many chocolates will each friend get?




4 Cookies for All
A box has 45 cookies. They are shared equally among 5 children. How many cookies will each child get?



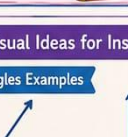
5 Buying Toys
A toy car costs ₹85. What will be the cost of 4 such toy cars?




6 Balloons
A shopkeeper has 7 packets of balloons. Each packet has 12 balloons. How many balloons are there in all?



7 Pencil Boxes
There are 6 boxes. Each box has 15 pencils. How many pencils are there in all?




8 Story Books
There are 96 story books on a shelf. They are kept equally in 3 rows. How many books are there in each row?




ROLL NO. 11 TO 20

2 Angles & Lines Art Sheet
Use colorful materials like: Ice cream sticks, Straws, Threads
Make and label


ANGLES




Acute Angle




Right Angle




Obtuse Angle


Straight Angle

LINES




Parallel Lines





Perpendicular Lines


ROLL NO. 21 TO 25

3 Roman Numeral Clock Model
Use waste materials: Cardboard, Bottle caps, Paper plates
Decorate with colors & stickers



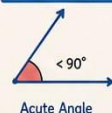




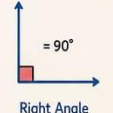


Visual Ideas for Inspiration

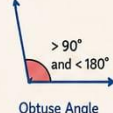
Angles Examples




Acute Angle



Right Angle





Obtuse Angle





Straight Angle

Roman Clock Ideas













MATHS WORKSHEET





Section A: Word Problems

- 1 Riya bought 25 apples and 37 oranges.
Total fruits?


 $25 +$

 $=$

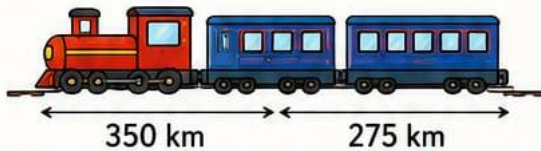
- 2 A box has 48 chocolates.
Shared among 6 children.
Each gets?


 \div

 $=$

- 3 A book costs ₹125.
What is cost of 4 books?


 $\times 4 =$

- 4 A train travels 350 km,
then 275 km.
Total distance?


 $=$

Section B: Place Value

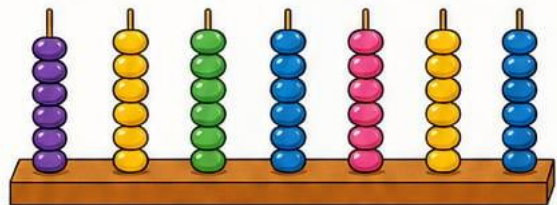
- 1 Write 45,67,890 in words (Indian system)

- 2 Write 9,876,543 in words (International system)

- 3 Expand: 5,43,210

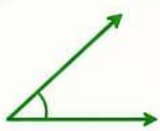
+ + + +

Ten Lakhs	Lakhs	Ten Thousands	Thousands	Hundreds	Tens	Ones
4	5	6	7	8	9	0

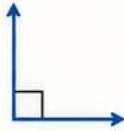


Section C: Geometry

- 1 Draw and name:



Acute angle



Right angle



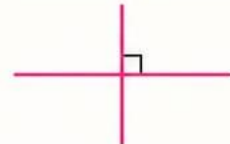
Obtuse angle

- 2 Identify:

Two parallel lines



Two perpendicular lines



Section D: Roman Numerals

- 1 Write in Roman numerals:

★ 25 = _____

★ 48 = _____

★ 99 = _____



- 2 Convert:

★ XL = _____

★ LXV = _____

Roman Numerals

I = 1	V = 5
X = 10	L = 50
C = 100	D = 500
M = 1000	

SCIENCE

Holiday homework is to help students revise and reinforce the concepts they have learned during the school. It also encourages continuous learning and keeps students engaged in educational activities even when they are away from school.

Summer Break Guidelines:

- Go for a morning walk
- Spend quality time with your grandparents
- Play outdoor games daily
- Eat balanced diet daily
- Water the potted plants
- Do some yoga exercises daily



Instructions:

- ✓ Use a scrapbook or Chart and follow the instructions carefully
- ✓ Make the cover page very attractive with the title: Amazing world of Science
- ✓ Be as neat and colorful as possible!

ROLL NO. 1-12:

- ROLL NO. 1-4: Make a 3D model of Parts of seed. Make it neat, clean and well labeled.
- ROLL NO. 5-8: Make a 3D model of Dicot seed. Make it neat, clean and well labeled.
- ROLL NO. 9-12: In a scrapbook write the difference between Rabi and kharif crops and paste the samples.



ROLL NO. 13 Onwards:

- ROLL NO. 13-16- write the essential nutrients and paste pictures of food sources which provides them. (Carbohydrates- wheat/Chappati)
- ROLL NO. 17-20: Eat a balanced diet for 15 days and make a chart of food items it includes.
- ROLL NO. 21 AND ONWARDS: Make a chart on various kinds of germs.


Make your holidays productive, creative, and enjoyable. Learn new things, stay curious, and come back with wonderful experiences to share in class.



HOLIDAY HOMEWORK


ASSIGNMENT

CLASS 5



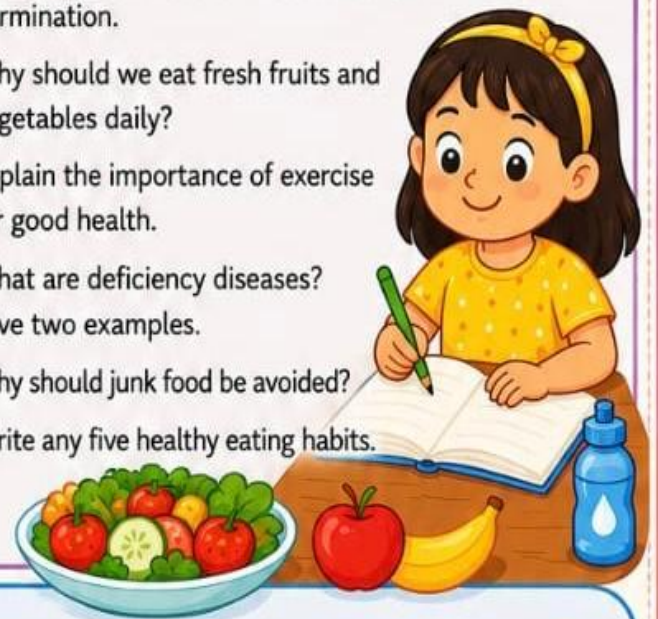
A. VERY SHORT ANSWER QUESTIONS

1. What is reproduction in plants?
2. What do seeds need to grow?
3. Give one example of a plant that grows from stem cutting.
4. What is germination?
5. Name one plant that reproduces through spores.
6. Why do we need food?
7. What are nutrients?
8. Name the nutrient that gives us energy.
9. Which nutrient helps in body building?
10. Name two protective foods.
11. What is a balanced diet?
12. Why is water important for our body?
13. Name one disease caused by lack of Vitamin C.



B. SHORT ANSWER QUESTIONS

1. Draw and label the germination of seeds
2. Explain the process of seed germination.
3. How do animals help in seed dispersal?
4. Why are seeds important for plants?
5. Explain how a new plant grows from a seed.
6. Write any three conditions necessary for germination.
7. Why should we eat fresh fruits and vegetables daily?
8. Explain the importance of exercise for good health.
9. What are deficiency diseases? Give two examples.
10. Why should junk food be avoided?
11. Write any five healthy eating habits.




C. FILL IN THE BLANKS

1. The baby plant inside a seed is called _____.
2. Potato reproduces through _____.
3. Seeds are protected inside the _____.
4. Bryophyllum reproduces through _____.
5. _____ is a Rabi crop.
6. _____ is a kharif crop.
7. Carbohydrates give us _____.
8. Milk, eggs, and pulses are rich in _____.
9. Fruits and vegetables are rich in _____ and minerals.
10. Lack of Vitamin D causes _____.



Use your holidays to **learn**, **explore**, and **grow**!

Stay healthy, stay happy! 


Social Science

SESSION-2026-27


- GROUP 1** ACTIVITY- 1-5
- GROUP 2** ACTIVITY-6-11
- GROUP 3** ACTIVITY- 12-17
- GROUP 4** ACTIVITY -18-23

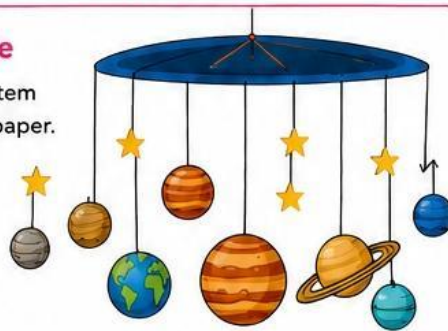
1 Activity 1 – Solar System Mobile

Make a colourful hanging mobile of the solar system using paper plates, thermocol balls or coloured paper.

 Label all the planets:

- _____ : _____
- _____ : _____
- _____ : _____
- _____ : _____

 Decorate with stars and glitter.




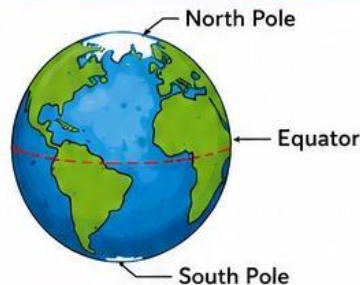
2 Activity 2 – My Earth Model

Make a model of the Earth using clay or a ball.

Label:

- _____ : _____
- _____ : _____
- _____ : _____

 Use blue and green colours neatly.



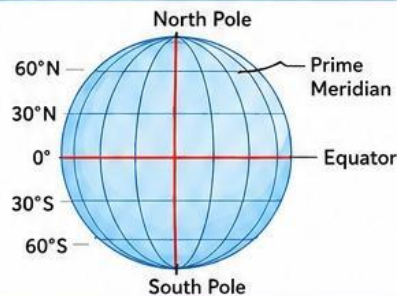
3 Activity 3 – Latitude & Longitude Grid

Draw a globe on an A3 sheet and show:

- _____ : _____
- _____ : _____
- _____ : _____

 Write 5 lines about:


- _____
- _____
- _____



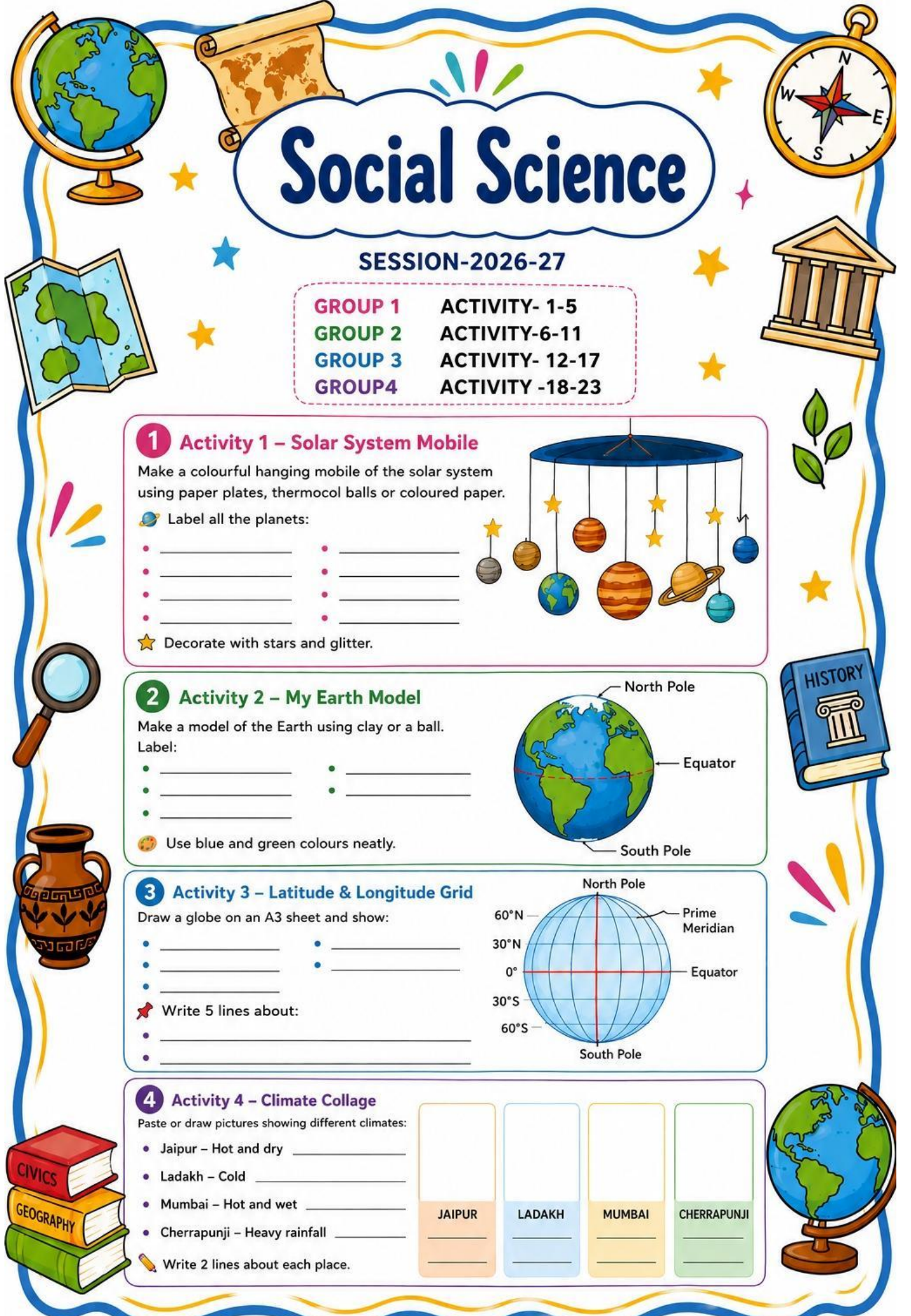
4 Activity 4 – Climate Collage


Paste or draw pictures showing different climates:

- Jaipur – Hot and dry _____
- Ladakh – Cold _____
- Mumbai – Hot and wet _____
- Cherrapunji – Heavy rainfall _____

 Write 2 lines about each place.

JAIPUR	LADAKH	MUMBAI	CHERRAPUNJI
_____	_____	_____	_____





Social Science Assignment

This is compulsory for all students.



A. Fill in the blanks-

1. The ___ river is the second largest river in Africa.
2. Place at higher ___ are cooler.
3. ___ is called the white continent.
4. The capital city of DRC is_____.

B. Very short Q/A-

1. Which river is called the "Highway of central Africa".

2. What is altitude.

3. Write any four important latitudes.

- _____
- _____
- _____
- _____

4. Define Symbols.

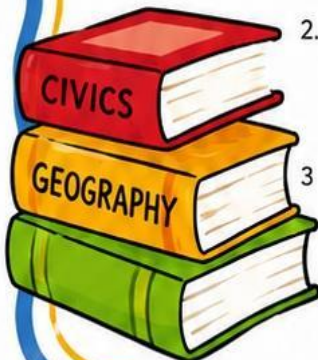

C. Short Q/A-


1. What is sea breeze and land breeze.

2. Describe the location of DRC?

3. Write any three Features of equatorial climate.

- _____
- _____
- _____





SUMMER HOLIDAYS HOMEWORK

GENERAL KNOWLEDGE – CLASS V

SESSION: 2026–27



GENERAL INSTRUCTIONS



Complete work in a scrapbook



Make it colorful & creative



Use pictures & drawings



Write in your own words



Revise all work

PROJECT OF GK

PROJECT 1: (Roll No. 1–5) THEME: MY INDIA'S WONDERS



FAMOUS MONUMENTS:

Identify and paste pictures of 3 Indian historical monuments.

- Write their Name
- Location, and an interesting fact.



NOTABLE FESTIVALS:

Research any 3 Indian festivals and describe:

- Name
- When it's celebrated, and a key ritual.

(Include colorful drawings/photos)



PROJECT 2: (Roll No. 6–10) THEME: GLOBAL EXPLORER



CAPITALS OF NATIONS:

Select 5 countries and list their:

- Capital
- Official Language, and one unique custom.



ICONIC LANDMARKS:

Find facts and photos for 3 major world landmarks like the Eiffel Tower, Great Wall, etc.



- Name
- Location, Year completed (approx),
- Why it's famous.

THEMET 3: SCIENCE ADVENTURES (Roll No. 11–15)



MY HOME LABORATORY:

Describe 2 simple science experiments you can do at home with parents' help (e.g., sink or float, walking water). Note materials and observations.



ACTIVITY 3: AMAZING ANIMALS

Choose 3 fascinating animals and find details on:

- Habitat
- Dietary habits
- and a cool survival feature.



THEMET 5: PROL: THE GREEN EARTH (Roll No. 16–25)

ACTIVITY 4: LEADERS & LEGENDS

GREAT LEADERS:

Research one past and one present world leader.

- Name, Country, and one key achievement.



ACTIVITY 5: SPORTS ICONS

Write Profiles of 3 famous sports personalities.

SPORTSPERSON 1

Sport: _____

Achievements: _____

SPORTSPERSON 2

Sport: _____

Achievements: _____

SPORTSPERSON 3

Sport: _____

Achievements: _____



FINAL NOTE

Revise all your work – a **SURPRISE QUIZ** awaits! (Class V level)





Subject :

MORAL EDUCATION



“VALUES AROUND ME”



PROJECT



Prepare a small scrapbook or file of about **8 to 10 pages** on the topic “**Becoming a Better Human Being.**”

Include the following activities:



1. MY ROLE MODEL



Paste/draw a picture of a person you admire and write 8–10 lines about the good qualities you wish to learn from them.



2. ACTS OF KINDNESS CHALLENGE

Perform any 7 acts of kindness during the holidays and make a checklist with dates.



S.NO.	ACT OF KINDNESS	DATE
1.		
2.		
3.		
4.		
5.		
6.		
7.		



COMPUTER

Topic: Ages of Computer

Q1. Fill in the blanks:

- 1 The first generation computers used ___ tubes.
- 2 Second generation computers used ___.
- 3 Third generation computers used ___ circuits.
- 4 Modern computers belong to the ___ generation.

Q2. Make a chart of generation of computer.

ART

1. Make a creative paper and cup animals using disposable glasses.

The image is for reference



2. Students are instructed to create a creative showpiece using the concept of “Best Out of Waste” with materials such as plastic bottles, old bangles, newspapers, cardboard, or other reusable household items. Students should ensure that their work is neat, attractive, and presented properly.

Video link - <https://youtu.be/x3-uMG2zxPo>